

さんすう

たしざんのけいさん
10より おおきいかずの けいさん



なまえ

ステップ 1

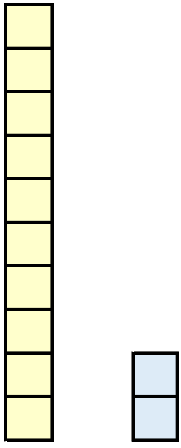
① 十 + いくつかのけいさん	3 - 1 ~ 6
② 十いくつか + いくつかのけいさん	3 - 7 ~ 12

あわせると いくつに なりますか。

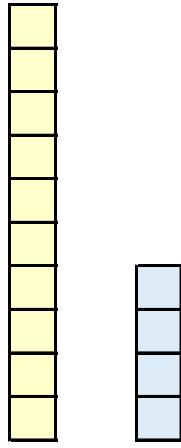
しきと こたえを かきましょう。

10 + 3 =

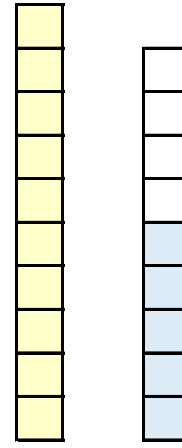
けいさんを しましょう。



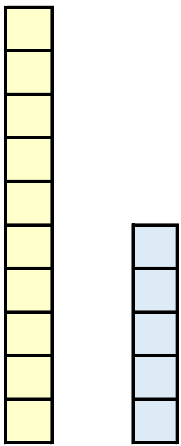
$10 + 2 = \square$



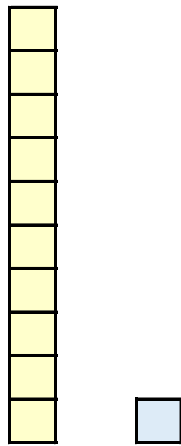
$10 + 4 = \square$



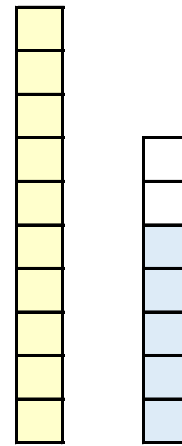
$10 + 9 = \square$



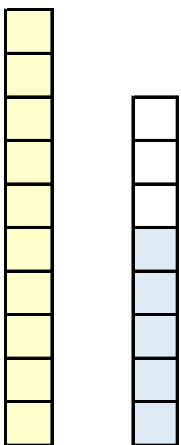
$10 + 5 = \square$



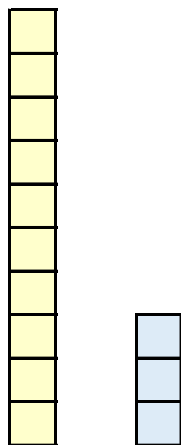
$10 + 1 = \square$



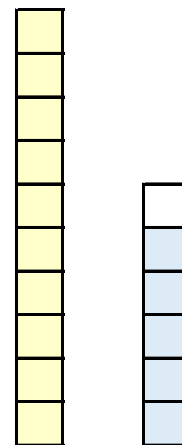
$10 + 7 = \square$



$10 + 8 = \square$



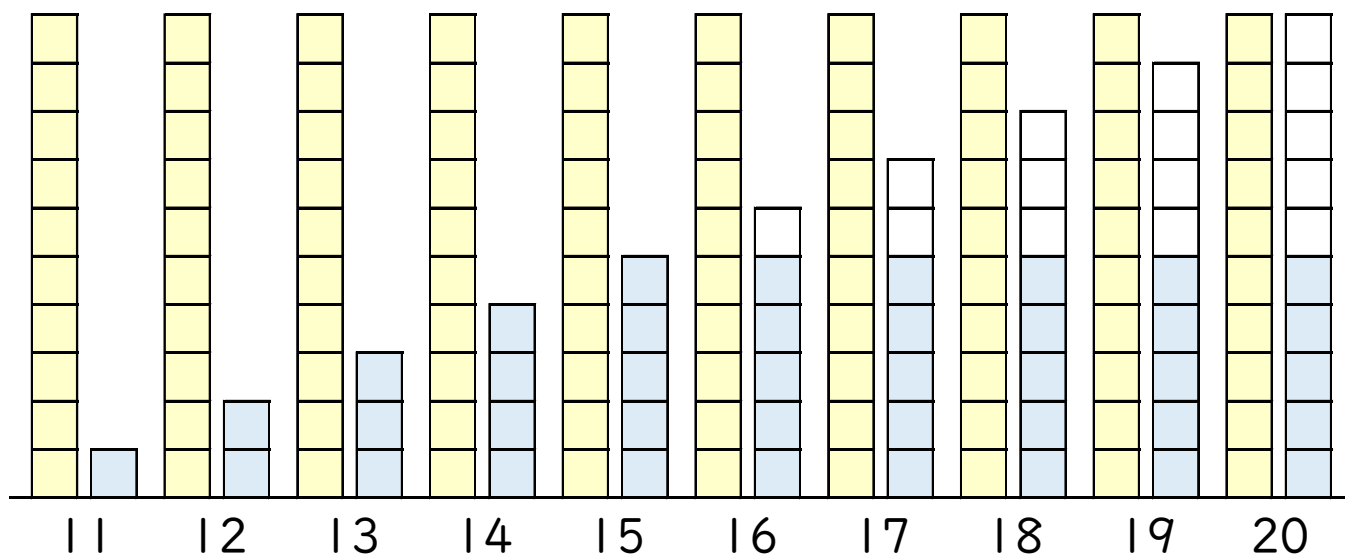
$10 + 3 = \square$



$10 + 6 = \square$



けいさんを しましょう。



$10 + 1 = \square$

$10 + 5 = \square$

$10 + 6 = \square$

$10 + 8 = \square$

$10 + 3 = \square$

$10 + 2 = \square$

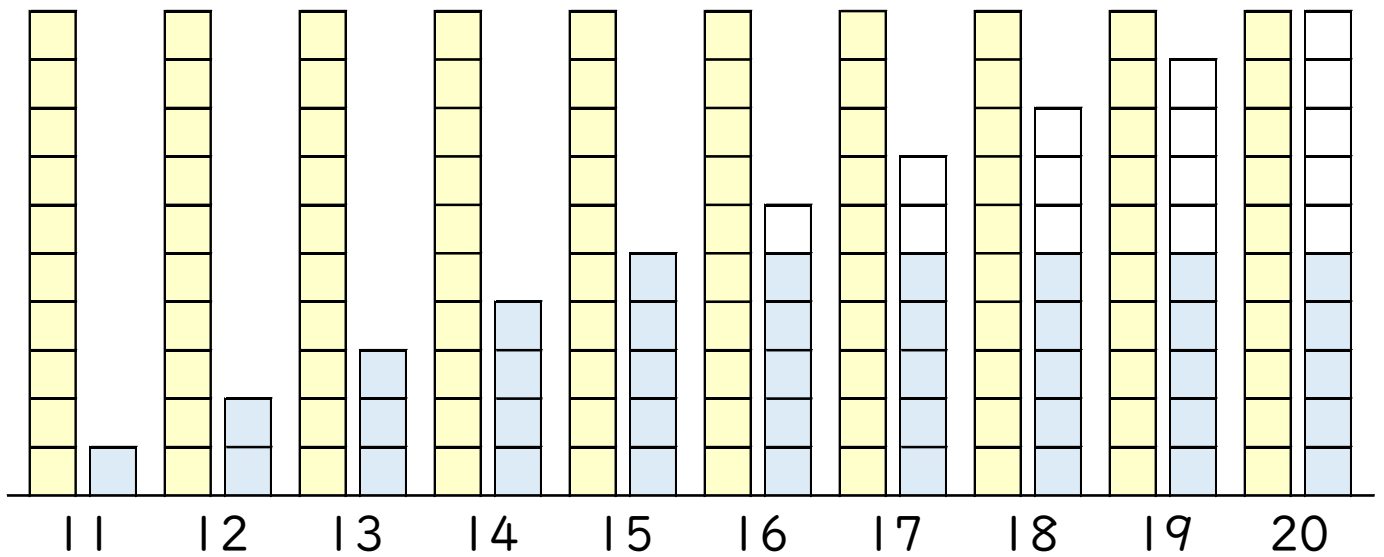
$10 + 7 = \square$

$10 + 4 = \square$

$10 + 9 = \square$

$10 + 10 = \square$

けいさんを しましょう。



$10 + 2 = \square$

$10 + 3 = \square$

$10 + 6 = \square$

$10 + 8 = \square$

$10 + 5 = \square$

$10 + 1 = \square$

$10 + 4 = \square$

$10 + 7 = \square$

$10 + 9 = \square$

$10 + 10 = \square$

$10 + \square = 13$

$10 + \square = 18$

けいさんを しましょう。

$10 + 5 = \square$

$10 + 6 = \square$

$10 + 7 = \square$

$10 + 2 = \square$

$10 + 0 = \square$

$10 + 10 = \square$

$10 + 3 = \square$

$10 + 8 = \square$

$10 + 4 = \square$

$10 + 1 = \square$

$10 + 9 = \square$

$10 + 3 = \square$

けいさんを しましょう。

$10 + 8 = \square$

$10 + 9 = \square$

$10 + 1 = \square$

$10 + 5 = \square$

$10 + 3 = \square$

$10 + 6 = \square$

$10 + 7 = \square$

$10 + 4 = \square$

$10 + 2 = \square$

$10 + 6 = \square$

$10 + 10 = \square$

$10 + 7 = \square$

あわせると いくつに なりますか。

しきと こたえを かきましょう。

10 + 2 = 12

12 + 3 =

10 + 1 = 11

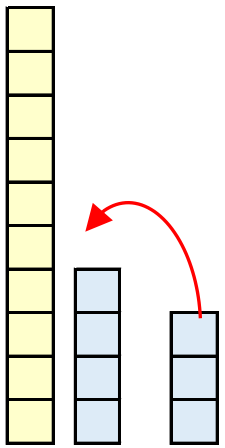
10 + 3 = 13

10 + 4 = 14

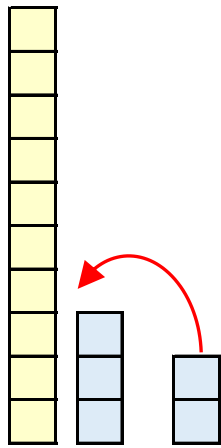
10 + 5 = 15

10 + 1 = 11

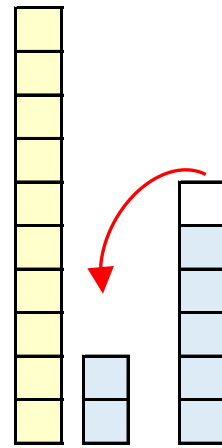
けいさんを しましょう。



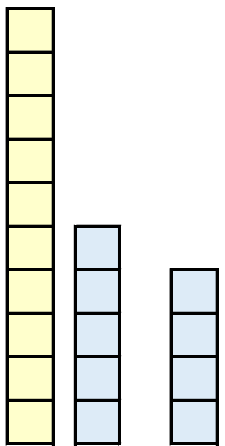
$14 + 3 =$



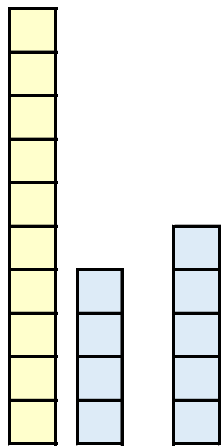
$13 + 2 =$



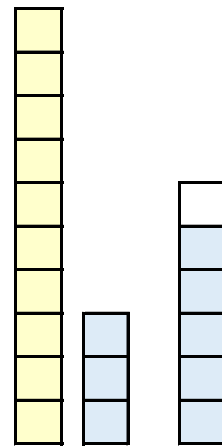
$12 + 6 =$



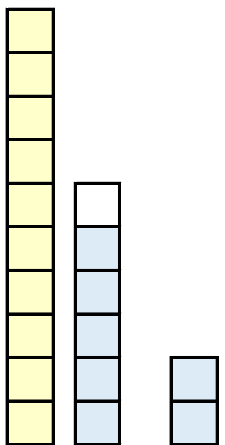
$15 + 4 =$



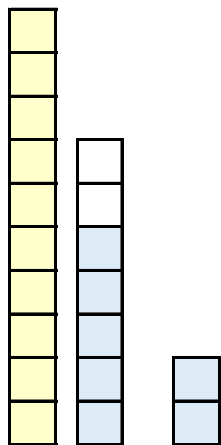
$14 + 5 =$



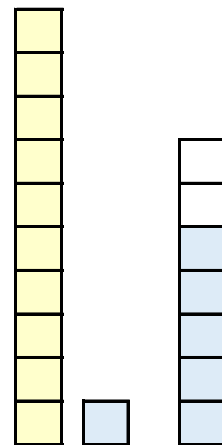
$13 + 6 =$



$16 + 2 =$

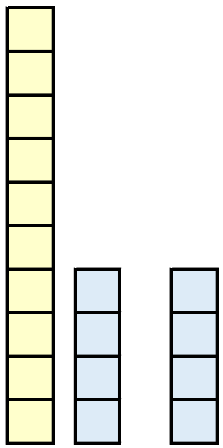


$17 + 2 =$

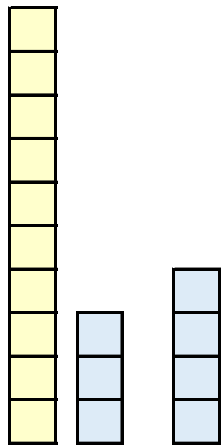


$11 + 7 =$

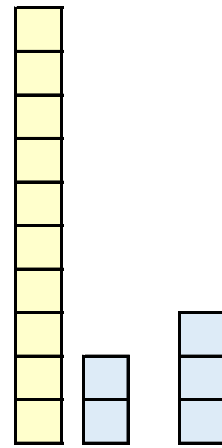
けいさんを しましょう。



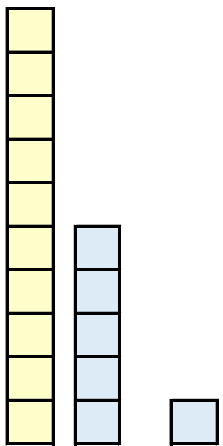
$14 + 4 = \square$



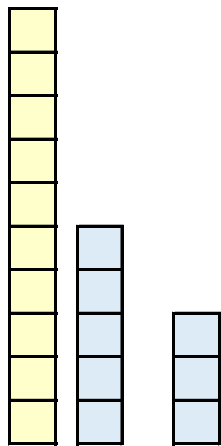
$13 + 4 = \square$



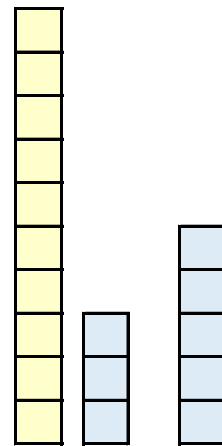
$12 + 3 = \square$



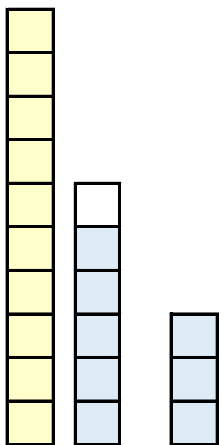
$15 + 1 = \square$



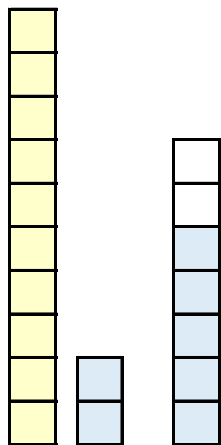
$15 + 3 = \square$



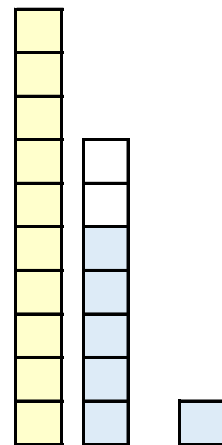
$13 + 5 = \square$



$16 + 3 = \square$



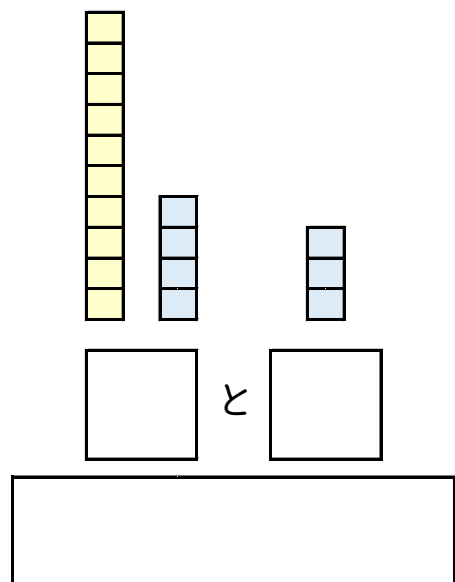
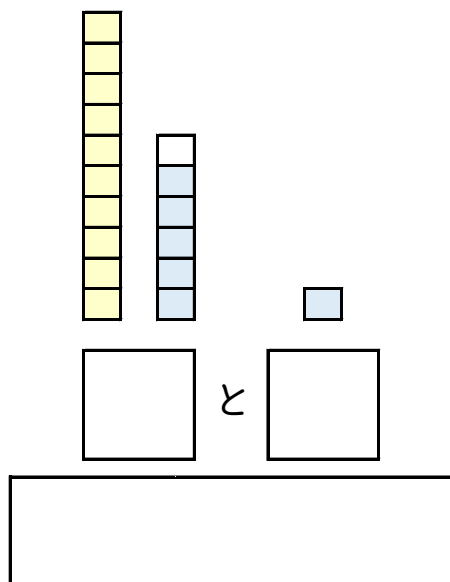
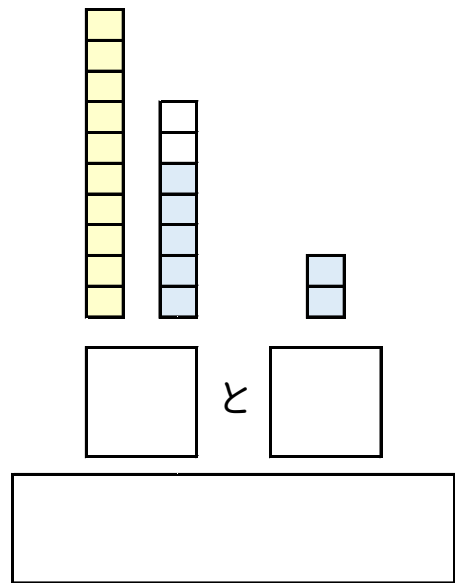
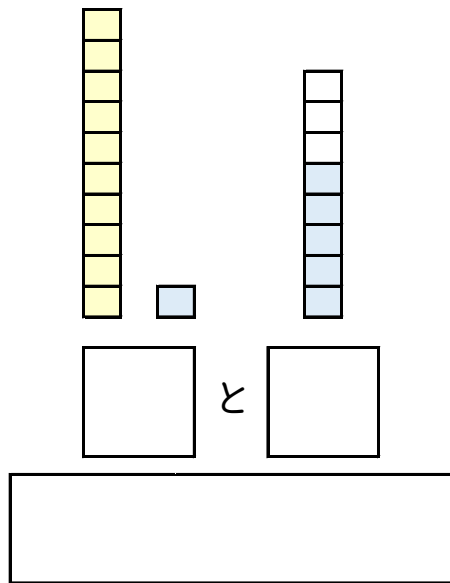
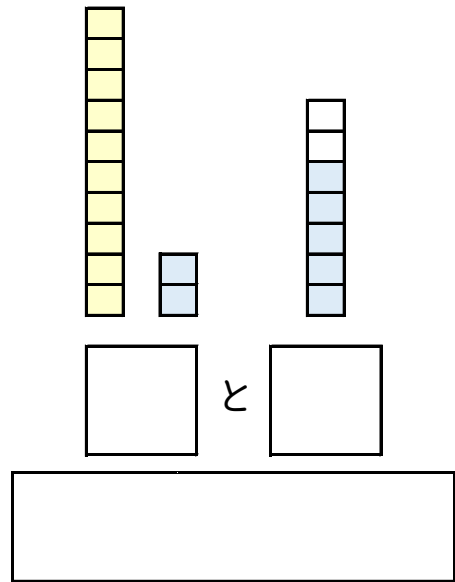
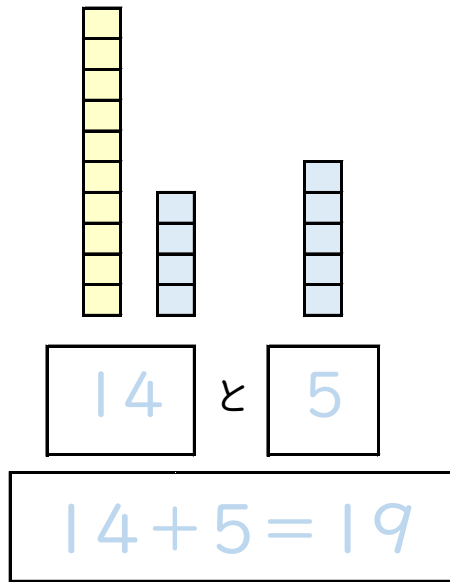
$12 + 7 = \square$



$17 + 1 = \square$



2つのかずを あわせるしきを かきましょう。



けいさんを しましょう。

$11 + 3 = \square$

$12 + 5 = \square$

$14 + 2 = \square$

$13 + 4 = \square$

$16 + 2 = \square$

$17 + 1 = \square$

$15 + 3 = \square$

$18 + 1 = \square$

$12 + 6 = \square$

$16 + 3 = \square$

$15 + 4 = \square$

$14 + 4 = \square$

けいさんを しましょう。

$14 + 5 = \square$

$11 + 4 = \square$

$12 + 3 = \square$

$14 + 1 = \square$

$11 + 8 = \square$

$13 + 6 = \square$

$17 + 2 = \square$

$16 + 1 = \square$

$15 + 1 = \square$

$13 + 3 = \square$

$14 + 3 = \square$

$15 + 2 = \square$